


Use this sheet to complete your maths challenges!


Bananas



Pears



Pineapples



Apples




Peaches



Grapes



Oranges





Money Challenge 5



How much would it cost to buy **5 bunches of bananas, 8 pears and 12 peaches?**



twinkl.co.uk



Money Challenge 6

How much would it cost to buy **4 bunches of grapes, 12 oranges and 10 apples?**



twinkl.co.uk



Money Challenge 7



You have €8.00. Can you afford to buy **2 bunches of bananas and 3 pineapples?** Work out how much change you will get or how much more money you may need.

twinkl.co.uk



Money Challenge 8

You have €15.00. Can you afford to buy **4 pineapples, 12 peaches, 8 apples and 24 oranges?** Work out how much it will be and how much change or more money you will need.



twinkl.co.uk