


Use this sheet to complete your maths challenges!


Bananas



Pears



Pineapples



Apples




Peaches



Grapes



Oranges





## Money Challenge 1



How much would it cost to buy **2 bunches of bananas, 5 apples and 6 peaches?**



twinkl.co.uk



## Money Challenge 2

How much would it cost to buy **1 pineapple, 12 oranges and 3 bunches of grapes?**



twinkl.co.uk



## Money Challenge 3



You have €5.00. Can you afford to buy **12 peaches?** Work out how much change you will get or how much more money you need, if not.

twinkl.co.uk



## Money Challenge 4

You have €12.00. Can you afford to buy **2 pineapples, 6 peaches, 8 apples, 24 oranges?** Work out how much it will be and how much change or more money you will need.



twinkl.co.uk